

Name _____


Algebra • Use Pictures to Add To



COMMON CORE STANDARD—1.OA.A.1
Represent and solve problems involving addition and subtraction.

Write how many.

1.



5 horses


and



3 more horses


_____ horses

2.



3 dogs


and



2 more dogs

_____ dogs

Problem Solving



3. There are 2 rabbits. 5 rabbits join them.
How many rabbits are there now?


There are _____ rabbits.

4. **Math** Use pictures and numbers to show 4 dogs and 1 more dog. Then write how many dogs there are.

Lesson Check (1.OA.A.1)

1. How many birds are there?

Write the number.



2 birds and 6 more birds _____ birds

Spiral Review (1.OA.A.1)

2. How many goats are there?

Write the number.

2 goats and 4 more goats _____ goats

3. How many rabbits are there?

Write the number.

5 rabbits and 1 more rabbit _____ rabbits

4. How many ducks are there?

Write the number.

5 ducks and 4 more ducks _____ ducks
