

Name _____

Model Adding To**COMMON CORE STANDARD—1.OA.A.1**
Represent and solve problems involving addition and subtraction.Use  to show adding to.
Draw the . Write the sum.

1. 5 ants and 1 more ant



2. 3 cats and 4 more cats

$5 + 1 = \underline{\quad}$


$3 + 4 = \underline{\quad}$

Problem Solving

Use the picture to help you complete the addition sentences. Write each sum.

3. $\underline{\quad}$  + $\underline{\quad}$  = $\underline{\quad}$  in all4. $\underline{\quad}$  + $\underline{\quad}$  = $\underline{\quad}$  in all5.  Use cubes to show how to add 1 turtle to 5 turtles. Draw the cubes.

Lesson Check (1.OA.A.1)

1. Draw the . Write the sum. What is the sum of 4 and 2?

$$4 + 2 = \underline{\quad}$$

Spiral Review (1.OA.A.1)

2. How many butterflies are there?

Write the number.

5 butterflies and 2 more butterflies butterflies

-
3. Draw the . Write the sum. What is the sum of 2 and 3?

$$2 + 3 = \underline{\quad}$$

-
4. How many birds are there?

Write the number.

6 birds and 1 more bird birds