

Name _____




Make Picture Graphs



COMMON CORE STANDARD—1.MD.C.4
Represent and interpret data.

Which dinosaur do the most children like best? Ask 10 friends.

Draw 1 circle for each child's answer.

Our Favorite Dinosaur										
 Tyrannosaurus										
 Triceratops										
 Apatosaurus										

Each ○ stands for 1 child.

Use the picture graph to answer the question.

1. How many children chose  ?


_____ children

2. Which dinosaur did the most children choose? Circle.



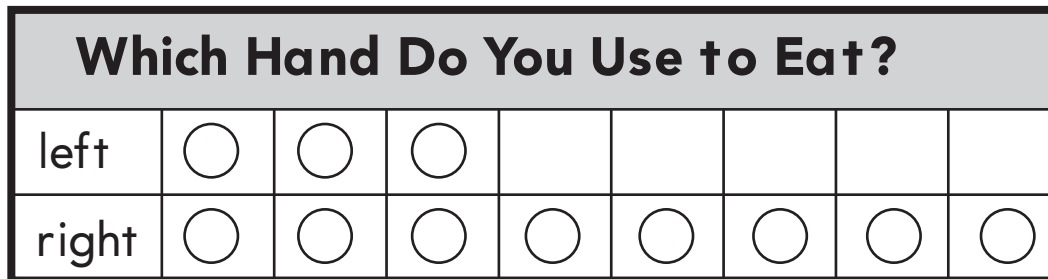
Problem Solving

3. Write your own question about the graph.

4.  Write a question that can be answered by making a picture graph.

Lesson Check (1.MD.C.4)

Use the picture graph to answer the question.



Each ○ stands for 1 child.

1. How many children use their right hand?
Write the answer.

_____ children

2. How many more children use their right hand than their left? Write a number sentence to solve the problem.

_____ more children

_____ ○ _____ ○ _____

Spiral Review (1.OA.C.6, 1.NBT.C.6)

3. Write the sum.

$$6 + 3 = \underline{\quad}$$

4. Write the difference. Write how many tens.

$$60 - 20 = \underline{\quad}$$

_____ tens