

Name _____

Problem Solving • Represent Data

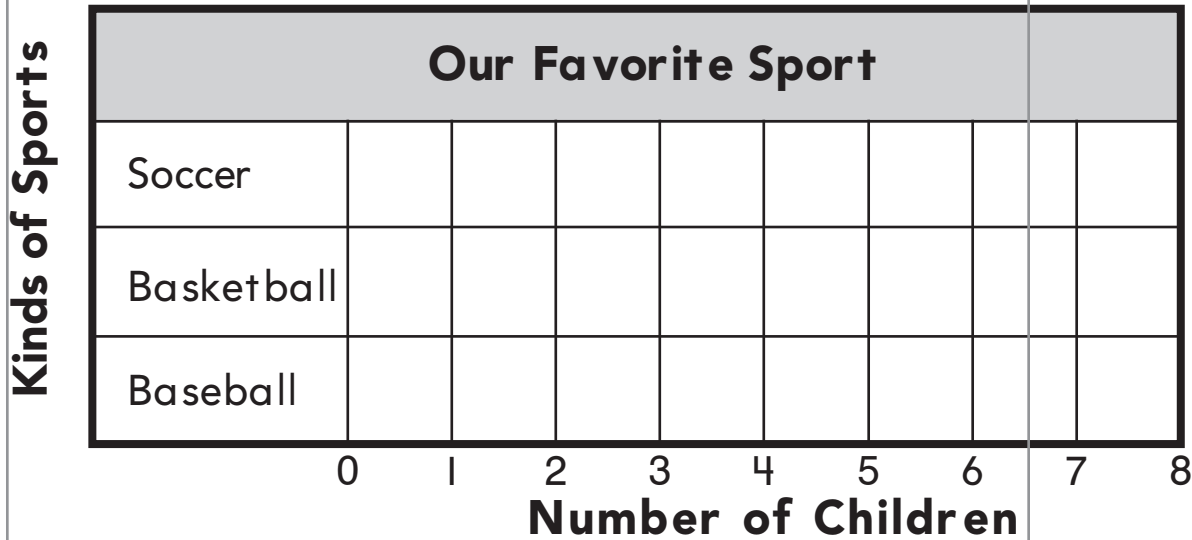


COMMON CORE STANDARD—1.MD.C.4
Represent and interpret data.

Bella made a tally chart to show the favorite sport of 10 friends.

Our Favorite Sport	
Soccer	I
Basketball	
Baseball	

Use the tally chart to make a bar graph.




Use the graph to solve.

- How many friends chose soccer?
_____ friends
- How many friends chose soccer or basketball?
_____ friends

3. **Math** Write the names of 3 types of animals. Count the letters in each name. Make a bar graph showing the letter for each animal.

Lesson Check (1.MD.C.4)

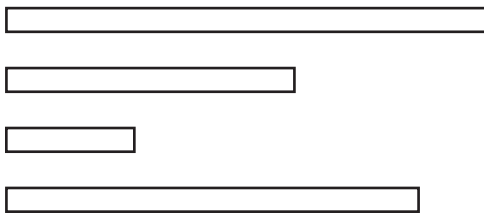


1. Use the graph. How many more children have fish than a dog?

_____ more

Spiral Review (1.MD.A.1, 1.MD.B.3)

2. Which ribbon is the shortest?
Color the shortest ribbon.



3. Look at the hour hand.
Write the time.

