

Name _____

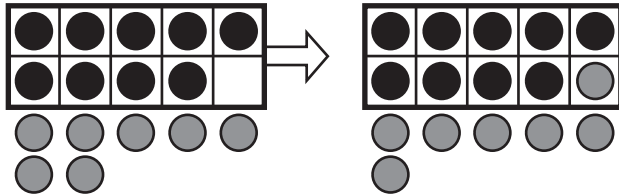
Use Make a 10 to Add



COMMON CORE STANDARD—1.OA.C.6
Add and subtract within 20.

Write to show how you make a ten. Then add.

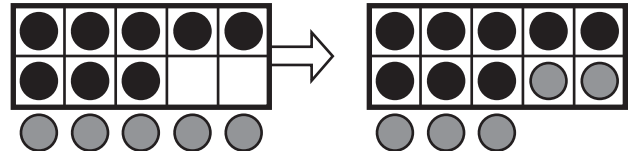
1. What is $9 + 7$?



$$\begin{array}{r} \underline{\quad} + \underline{\quad} + \underline{\quad} \\ \swarrow \quad \searrow \\ \underline{\quad} + \underline{\quad} = \underline{\quad} \end{array}$$

So, $9 + 7 = \underline{\quad}$.

2. What is $5 + 8$?



$$\begin{array}{r} \underline{\quad} + \underline{\quad} + \underline{\quad} \\ \swarrow \quad \searrow \\ \underline{\quad} + \underline{\quad} = \underline{\quad} \end{array}$$

So, $5 + 8 = \underline{\quad}$.

Problem Solving



Use the clues to solve. Draw lines to match.

3. Ann eats 10 green grapes and 6 red grapes. Gia eats the same number of grapes as Ann. Match each person to her grapes.

Ann

7 green grapes and 9 red grapes

Gia

10 green grapes and 6 red grapes

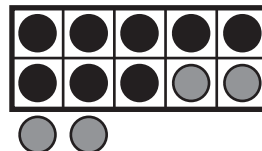
4. Draw to explain how you would make a ten to find $5 + 8$.

Lesson Check (1.OA.C.6)

1. Write the number sentence.
Make a ten to find $8 + 4$.

Write the number sentence.

$$\underline{\quad} + \underline{\quad} + \underline{\quad} = \underline{\quad}$$



Spiral Review (1.OA.C.6, 1.OA.D.8)

2. What is the difference?
Complete the subtraction sentence.

$$\begin{array}{r} 5 \\ - 5 \\ \hline \end{array}$$

-
3. What is the difference?
Write the difference.

$$\begin{array}{r} 8 \\ - 2 \\ \hline \end{array}$$

