



Name _____

Record Related Facts

COMMON CORE STANDARD—1.OA.C.6
Add and subtract within 20.Use  . Add or subtract. Complete the related facts.

1. $4 + \square = 12$ $\square - 8 = 4$

$8 + 4 = \square$ $\square - \square = \square$

2.

$\square + 4 = 9$ $9 - 4 = \square$

$\square + 5 = 9$ $\square - \square = \square$


Problem Solving

Choose a way to solve.
Write or draw to explain.

3. There are 16 apples on the tree. No apples fall off.
-
- How many apples are still on the tree?



_____ apples

- 4.
- 
- WRITE**
- Math Write four related facts. Use pictures to show how the number sentences are related.

Lesson Check (1.OA.C.6)

1. Write a related fact.

$$7 + 4 = 11$$

$$4 + 7 = 11$$

$$11 - 7 = 4$$

$$\square - \square = \square$$

Spiral Review (1.OA.B.4, 1.OA.D.8)

2. Complete the subtraction sentence.

$$6 - 6 = \underline{\quad}$$

3. Write an addition sentence that helps you solve $15 - 9$.

$$\underline{\quad} + \underline{\quad} = \underline{\quad}$$