

Identify Related Facts



COMMON CORE STANDARD—1.OA.C.6
Add and subtract within 20.

Add and subtract.
Circle the related facts.

1. $5 + 6 = \underline{\quad}$

$11 - 6 = \underline{\quad}$

2. $4 + 9 = \underline{\quad}$

$9 - 4 = \underline{\quad}$

3. $4 + 7 = \underline{\quad}$

$11 - 7 = \underline{\quad}$

4. $9 + 8 = \underline{\quad}$

$17 - 8 = \underline{\quad}$

5. $5 + 7 = \underline{\quad}$

$7 - 5 = \underline{\quad}$

6. $6 + 8 = \underline{\quad}$

$14 - 8 = \underline{\quad}$

Problem Solving



7. Use the numbers to write related addition and subtraction sentences.



$\underline{\quad} + \underline{\quad} = \underline{\quad}$

$\underline{\quad} - \underline{\quad} = \underline{\quad}$



8. Math Use numbers and pictures to show related facts with the numbers 7, 9, and 16.


Lesson Check (1.OA.C.6)

1. Write a related fact for $7 + 6 = 13$.

$$\underline{\quad} \bigcirc \underline{\quad} = \underline{\quad}$$

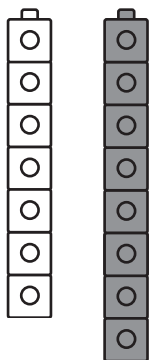
Spiral Review (1.OA.C.6, 1.OA.D.8)

2. Draw lines to match. Subtract to compare.
How many fewer  than  are there?



$$\underline{\quad} - \underline{\quad} = \underline{\quad} \quad \underline{\quad} \text{ fewer } \img alt="feather" data-bbox="818 588 863 639"/>$$

3. Use doubles to help you add $7 + 8$.



$$7 + 8$$

$$\underline{\quad} + \underline{\quad} + \underline{\quad}$$

$$\text{So, } 7 + 8 = \underline{\quad}.$$