


Name _____

Make Ten to Add



COMMON CORE STANDARD—1.NBT.C.4
Use place value understanding and properties of operations to add and subtract.

Use . Draw to show how you make a ten. Find the sum.

1. $26 + 5 =$ _____



2. $68 + 4 =$ _____




Problem Solving

Choose a way to solve. Draw or write to show your work.

3. Debbie has 27 markers. Sal has 9 markers. How many markers do they have?

_____ markers

4.  **Math** Use words or pictures to explain how to solve $44 + 7$.

Lesson Check (1.NBT.C.4)

1. What is the sum?
Write the number.


$$47 + 6 = \underline{\quad}$$

2. What is the sum?
Write the number.

$$84 + 8 = \underline{\quad}$$

Spiral Review (1.OA.D.7, 1.NBT.A.1)

3. What number does the model show?
Write the number.



4. Write a number to make the sentence true.

$$5 + 4 = 10 - \underline{\quad}$$