

Name \_\_\_\_\_

## Time to the Hour



COMMON CORE STANDARD—1.MD.B.3  
Tell and write time.


Look at where the hour hand points.  
Write the time.

1.



\_\_\_\_\_

2.



\_\_\_\_\_

3.



\_\_\_\_\_

### Problem Solving

Solve.


4. Which time is **not** the same? Circle it.



7:00

7 o'clock




5.  Draw a clock to show where the hour hand points for 11:00.



## Lesson Check (1.MD.B.3)

1. Look at the hour hand. What is the time? Write the time.



\_\_\_\_\_

2. Look at the hour hand. What is the time? Write the time.



\_\_\_\_\_ o'clock

## Spiral Review (1.NBT.C.4)

3. What is the sum? Write the number.

$$40 + 30 = \underline{\hspace{2cm}}$$

4. What is the sum? Write the number.

$$53 + 30 = \underline{\hspace{2cm}}$$