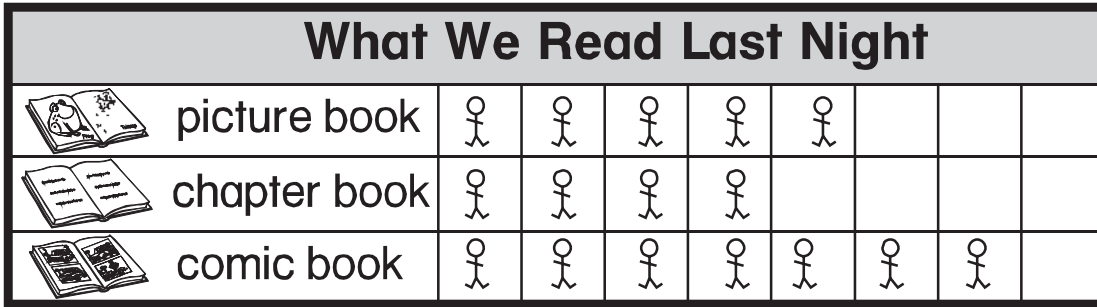


Name _____

Chapter 10 Extra Practice

Lessons 10.1 – 10.2 (pp. 413–420)

Use the picture graph to answer the question.



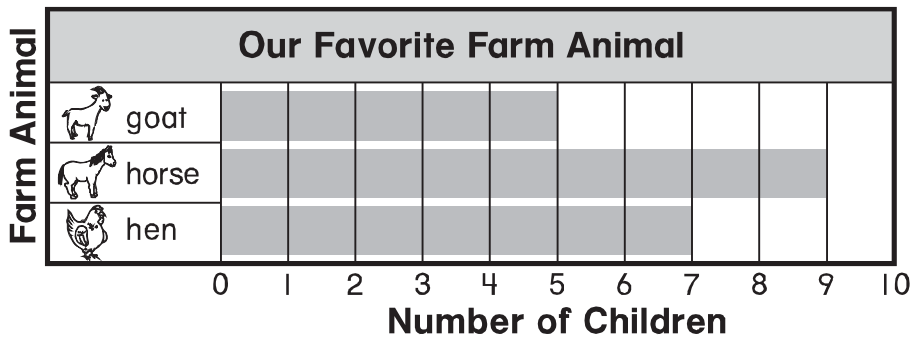
Each  stands for 1 child.


1. How many children read  last night? _____ children



2. Which book did the most children read? Circle.   

Lesson 10.3 (pp. 421–424)

Use the bar graph to answer the question.




1. How many children chose  ?
_____ children

2. How many more children chose  than  ?
_____ more children


Lesson 10.4 (pp. 425–427)

Ask 10 friends which toy they like best.

1. Make a bar graph.





2. Which toy did the most children choose? Circle.





3. How many children chose ? _____ children



Lessons 10.5 – 10.6 (pp. 429–436)

Complete the tally chart.

Our Favorite Class Pet		Total
 guinea pig		
 fish		

Use the tally chart to answer each question.

1. Which pet did more children choose? Circle.  

2. How many more children chose  than ? _____ more children