

Name \_\_\_\_\_

# Chapter 9 Extra Practice

## Lesson 9.1 (pp. 369–372) .....

Draw three paint brushes in order from **shortest** to **longest**.

I. **shortest**



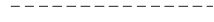
**longest**

## Lesson 9.2 (pp. 373–376) .....

Read the clues. Write **shorter** or **longer** to complete the sentence. Then draw to prove your answer.


- I. Clue 1: A gray line is longer than a white line.
- Clue 2: A white line is longer than a black line.


So, the gray line is \_\_\_\_\_ than the black line.


black	
white	
gray	

## Lesson 9.3 (pp. 377–380) .....

Use real objects. Use  to measure.

I. 



about \_\_\_\_\_ 


© Houghton Mifflin Harcourt Publishing Company

**Lesson 9.4** (pp. 381–384)

Use the measuring tool you made.

Measure real objects.

1.




about \_\_\_\_\_ 

**Lessons 9.6 – 9.7** (pp. 389–396)

Look at where the hour hand points. Write the time.

1.




\_\_\_\_\_

-----

\_\_\_\_\_

2.




\_\_\_\_\_

-----

\_\_\_\_\_

3.



\_\_\_\_\_


-----

\_\_\_\_\_


**Lessons 9.8 – 9.9** (pp. 397–404)

Write the time.

1.



2.



3.

